

April Maths Challenge

Choose a challenge to solve –
Can you solve more than one?

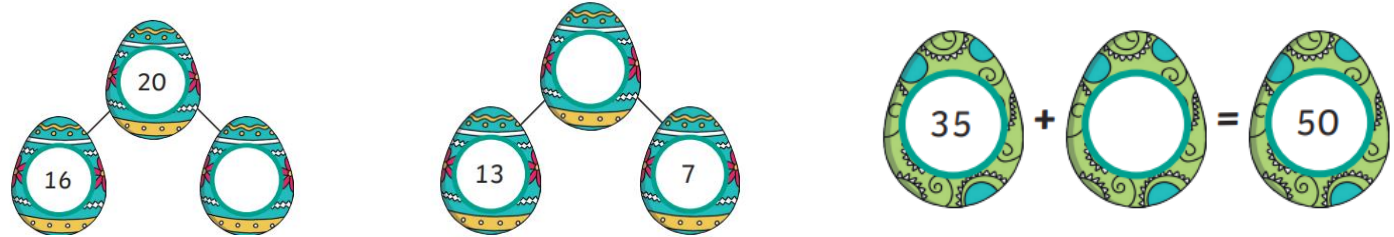
Challenge # 2

Complete the other half of the Easter Egg, making sure it is symmetrical.











Can you spot any other objects with lines of symmetry?

Challenge # 1 Fill in the missing numbers to complete the number bonds:



Challenge # 2

Write a set of directions to reach the Easter Egg from the starting point.

	lamb 		
Easter egg 			Easter bunny 
	daffodils 	Easter bonnet 	
chocolate bunny 		Start 	Easter basket 

Can you find your way to the other objects?

Creative Challenge

Can you create an Easter Egg using a **repeated** pattern? You can either draw your Easter Egg or be really creative and make your Easter Egg!